

**Dear Future 3<sup>rd</sup> Grader and Parents,**

Summer is finally here with its fun activities and sunshine. I hope your summer is filled with days at the beach, playing outside, enjoying friends, cookouts, and fireworks. Don't forget there is also plenty of time for you to prepare for the upcoming school year. Here are some requirements and helpful tips to make entering third grade a little smoother.

**Reading:** There's nothing better than sitting under a tree in the shade, or at the beach by the water's edge with a good book. Included in this packet is a reading list with some favorites. I am asking you to choose two books of your choice to read from the attached reading list. One book should be fiction and the other should be non-fiction. There will be a simple project in the fall for each book.

**Writing:** I encourage you to keep a journal at home. Write down one neat thing from your day. This year you will really work on bettering your phonics, language, grammar, and writing skills. Please note: I am not collecting and correcting the journals. This is for your benefit only!

**Math:** You should be working on memorizing your multiplication tables. This will help you stay on track. Don't forget about addition and subtraction too! Enclosed are the math sheets to help keep your math skills current. All of the work is a review from second grade and these skills will be reviewed within the first few weeks of school.

**Social Studies:** This year we learn all about Massachusetts. While you are traveling around Cape Cod this summer be on the lookout for landmarks and points of interest.

**Science:** Take some time to watch animals in their habitats or offer to help your parents in the garden. Enjoy the sunshine, notice weather patterns, and take a look at rocks you find while at the beach.

**Religion:** Even when you are enjoying this vacation, the Lord still wants to be a part of your life. Remember to attend Mass on Sunday with your family and take some special time to talk to Him through prayer.

I hope you have a wonderful summer. May it bless you with days of happiness and joy. I so look forward to starting a new school year together with you.

God Bless,

Mrs. Welch





## **Grade 3 Supplies**

### **For Classroom:**

- 2 Packages, Filler Paper, Wide Rule, 100 sheets/pack
- 4 Boxes of Tissues
- 3 Packages of Disinfecting Wipes
- 4 Rolls of Paper Towel

### **For Students:**

- 1 Binder, 3 Ring, Heavy Duty, 1"
- 1 Set Dividers, 3 Ring, 5-Tab, 11"x8.5", Asst.
- 3 Book Covers, Jumbo, Assorted Colors
- 1 Composition Notebook
- 3 Folders, 2 Pocket, Assorted Colors
- 1 Package, Index Cards 3"x5", Ruled, 100/pack
- 1 Pencil Pouch, Fabric, 10"x6"
- 2 Dozen Dixon Ticonderoga #2 Pencils, Sharpened
- 2 Erasers, Large, Latex Free
- 6 Red Ballpoint Pens, Non-clicking
- 1 Scissors 5"
- 1 Crayola 12 Count, Washable Markers, Wide Tip
- 1 Crayola 12 Count, Washable Markers, Fine Tip
- 1 Package of Expo Markers, Dry Erase, Chisel Tip, Low Odor, 8pk. Asst.
- 1 Crayola 24 Count, Colored Pencils
- 1 Crayola 24/Box, Crayons
- 1 Package of 5 Highlighters
- 4 Packages of 12 Count, Elmer's Glue Sticks
- 1 Westcott 12" Metal Edge Standard Wooden Ruler

### **Other Supplies Needed:**

- 1 Pair of Wired Earbuds with Standard 2.5mm Plug for Chromebook use.  
(Kept at School)



## Grade 3 (Suggested Summer Reading)

### Fiction

Adler, David - Young Cam Jansen Series  
Christopher, Matt - any sports titles  
Cleary, Beverly - Ramona and Henry Huggins Titles  
Cole, Joanna - Magic School Bus Series  
Cohen, Barbara - Molly's Pilgrim  
Dadey, Debbie - Bailey School Kids Series  
Danziger, Paula - Amber Brown Series  
Gardiner, John Reynolds - Stone Fox  
Hardy Boys Series  
Kline, Suzy - Horrible Harry Series  
MacLachlan, Patricia - Sarah, Plain and Tall  
Nancy Drew Series  
Osborne, Mary Pope - Magic Tree House Series  
Park, Barbara - June B. Jones Series  
Parrish, Peggy - any Amelia Bedelia titles  
Polacco, Patricia  
Sachar, Louis - Wayside School Series  
Sobol, Donald - Encyclopedia Brown Series  
Sharmat, Marjorie - Nate the Great Series  
Trixie Belden Series  
Warner, Gertrude Chandler - Boxcar Children Series  
Wilder, Laura Ingalls

### Non-Fiction

Biographies  
How-to books  
Informational books or articles  
Who Is/Was or What Is/Was Series

The above list is suggested reading only. Please encourage your child to read for pleasure daily. In early September, the students will be assigned a book jacket for one fiction book he/she has read during the summer. The students will choose one non-fictional story read during the summer and present 5-10 facts orally to the class.

Name \_\_\_\_\_

### Diagnosing Readiness for Grade 3

Circle the letter of the correct answer.

1. Find the related addition fact.

$$7 + 5 = 12$$


A.  $5 + 12 = 17$

B.  $5 + 7 = 12$

C.  $7 + 12 = 19$

D.  $7 + 7 = 14$

2. What time does this clock show?



A. 12:30

C. 1:30

B. 1:00

D. 2:30

3. Which number sentence solves this problem?

Tim has 7 dogs.

Mary has 2 dogs.

How many more dogs does

Tim have than Mary?



A.  $7 - 2 = 5$

C.  $7 - 3 = 4$

B.  $7 + 2 = 9$

D.  $7 + 0 = 7$

4. Add. Try different ways.

$$\begin{array}{r} 4 \\ 4 \\ + 5 \\ \hline \end{array}$$

A. 12

C. 14

B. 13

D. 15

5. Find the missing number.

$$14 - 6 = \square$$

$$6 + \square = 14$$

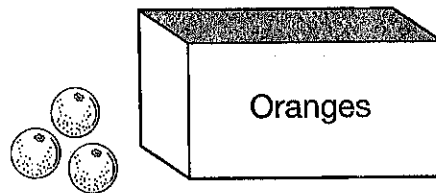
A. 6

C. 9

B. 8

D. 20

6. There are 10 oranges in all. How many of them are in the box?



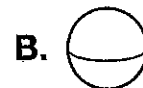
A. 4

C. 7

B. 6

D. 8

7. Which shape has 5 flat surfaces, 5 vertices, and 8 edges?



8. Add  $9 + 7$ .

A. 14

C. 16

B. 15

D. 17

9. Find the statement that is TRUE.

A.  $15 > 25$

C.  $71 < 73$

B.  $18 = 81$

D.  $35 < 34$

10. Count on to find the total amount.



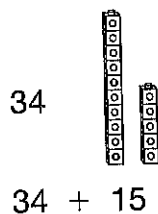
A. 97¢

C. 85¢

B. 92¢

D. 67¢

11. Add.



A. 38

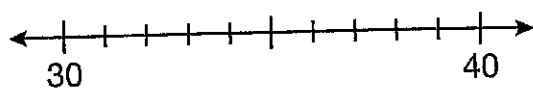
C. 47

B. 39

D. 49

12. Find the closest ten.

36 is closest to .



A. 20

C. 40

B. 30

D. 50

13. Find the shape that is congruent to the first shape.



A.

C.

B.

D.

14. Use the graph to answer the question. How many more chapter books than poetry books are in our room?

Poetry	
Chapter	
Picture	

Each = 2 books

A. 10

C. 4

B. 6

D. 2

15. Add  $47 + 37$ .

Tens	Ones
<input type="text"/>	<input type="text"/>
4	7
+ 3	7

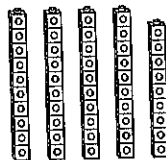
A. 10

C. 84

B. 74

D. 714

16. Subtract:  $49 - 26$



A. 13

C. 75

B. 23

D. 113

17. Find the fraction for the shaded part of the shape.




- A.  $\frac{1}{2}$                       C.  $\frac{1}{4}$   
 B.  $\frac{1}{3}$                       D.  $\frac{1}{5}$

18. Li read for 60 minutes.  
 Hattie read for 39 minutes.  
 How many more minutes did Li read than Hattie?

- A. 99 more minutes  
 B. 39 more minutes  
 C. 31 more minutes  
 D. 21 more minutes

19. Find the number.



Hundreds	Tens	Ones

- A. 145                      C. 451  
 B. 154                      D. 541

20. Add in any order.


$$\begin{array}{r} 32 \\ 14 \\ + 8 \\ \hline \end{array}$$

- A. 514                      C. 54  
 B. 414                      D. 44

21. Estimate  $87 - 26$ .

- A. 120                      C. 60  
 B. 90                      D. 40

22. Choose the best estimate for the height of the box.



- A. About 27 centimeters  
 B. About 27 meters  
 C. About 27 feet  
 D. About 27 yards

23. Choose the best estimate for the weight of the can.



- A. About 1 ounce  
 B. About 1 pound  
 C. About 1 gram  
 D. About 10 pounds

24. Which of these sets of numbers are in order from least to greatest?

- A. 102, 201, 210, 120
- B. 385, 485, 384, 483
- C. 422, 415, 420, 399
- D. 603, 630, 636, 663

25. Estimate. Find the sum that is MORE THAN 600.

- A.  $178 + 266$
- B.  $395 + 142$
- C.  $472 + 283$
- D.  $289 + 215$

26. Add.

$$\begin{array}{r} 695 \\ + 141 \\ \hline \end{array}$$

- A. 554
- B. 736
- C. 836
- D. 7,136

27. Find the number that comes before 280.

\_\_\_\_, 280


- A. 279
- B. 281
- C. 285
- D. 290

28. Subtract.

$$\begin{array}{r} 347 \\ - 186 \\ \hline \end{array}$$


- A. 161
- B. 241
- C. 261
- D. 281

29. Multiply  $2 \times 4$ .



- A. 2
- B. 4
- C. 6
- D. 8

30. Divide 6 teddy bears into 2 boxes. How many teddy bears go in each box?



- A. 8
- B. 6
- C. 4
- D. 3

Name \_\_\_\_\_

**Basic-Facts Timed Test 1**

Give each answer.

1.  $2 + 2 =$  \_\_\_\_\_

2.  $3 + 7 =$  \_\_\_\_\_

3.  $4 + 8 =$  \_\_\_\_\_

4.  $3 + 1 =$  \_\_\_\_\_

5.  $5 + 1 =$  \_\_\_\_\_

6.  $9 + 1 =$  \_\_\_\_\_

7.  $8 + 9 =$  \_\_\_\_\_

8.  $6 + 6 =$  \_\_\_\_\_

9.  $0 + 4 =$  \_\_\_\_\_

10.  $6 + 2 =$  \_\_\_\_\_

11.  $8 + 1 =$  \_\_\_\_\_

12.  $1 + 2 =$  \_\_\_\_\_

13.  $7 + 4 =$  \_\_\_\_\_

14.  $4 + 2 =$  \_\_\_\_\_

15.  $5 + 9 =$  \_\_\_\_\_

16.  $0 + 7 =$  \_\_\_\_\_

17.  $4 + 1 =$  \_\_\_\_\_

18.  $1 + 3 =$  \_\_\_\_\_

19.  $2 + 9 =$  \_\_\_\_\_

20.  $0 + 1 =$  \_\_\_\_\_

21.  $6 + 3 =$  \_\_\_\_\_

22.  $9 + 5 =$  \_\_\_\_\_

23.  $6 + 8 =$  \_\_\_\_\_

24.  $4 + 4 =$  \_\_\_\_\_

25.  $2 + 5 =$  \_\_\_\_\_

26.  $7 + 1 =$  \_\_\_\_\_

27.  $8 + 3 =$  \_\_\_\_\_

28.  $5 + 3 =$  \_\_\_\_\_

29.  $9 + 3 =$  \_\_\_\_\_

30.  $2 + 4 =$  \_\_\_\_\_

31.  $3 + 3 =$  \_\_\_\_\_

32.  $9 + 0 =$  \_\_\_\_\_

33.  $1 + 6 =$  \_\_\_\_\_

34.  $2 + 8 =$  \_\_\_\_\_

35.  $4 + 9 =$  \_\_\_\_\_

36.  $5 + 5 =$  \_\_\_\_\_

37.  $3 + 5 =$  \_\_\_\_\_

38.  $9 + 3 =$  \_\_\_\_\_

39.  $8 + 5 =$  \_\_\_\_\_

40.  $4 + 6 =$  \_\_\_\_\_

41.  $0 + 2 =$  \_\_\_\_\_

42.  $5 + 7 =$  \_\_\_\_\_

43.  $6 + 5 =$  \_\_\_\_\_

44.  $0 + 9 =$  \_\_\_\_\_

45.  $9 + 4 =$  \_\_\_\_\_

46.  $7 + 2 =$  \_\_\_\_\_

47.  $1 + 9 =$  \_\_\_\_\_

48.  $1 + 8 =$  \_\_\_\_\_

49.  $7 + 7 =$  \_\_\_\_\_

50.  $9 + 9 =$  \_\_\_\_\_



Name \_\_\_\_\_

**Basic-Facts Timed Test 2**

Give each answer.

1.  $4 - 2 =$  \_\_\_\_\_

2.  $10 - 7 =$  \_\_\_\_\_

3.  $12 - 8 =$  \_\_\_\_\_

4.  $4 - 1 =$  \_\_\_\_\_

5.  $6 - 1 =$  \_\_\_\_\_

6.  $10 - 1 =$  \_\_\_\_\_

7.  $17 - 9 =$  \_\_\_\_\_

8.  $12 - 6 =$  \_\_\_\_\_

9.  $4 - 0 =$  \_\_\_\_\_

10.  $8 - 2 =$  \_\_\_\_\_

11.  $9 - 1 =$  \_\_\_\_\_

12.  $3 - 2 =$  \_\_\_\_\_

13.  $11 - 4 =$  \_\_\_\_\_

14.  $6 - 2 =$  \_\_\_\_\_

15.  $14 - 9 =$  \_\_\_\_\_

16.  $7 - 7 =$  \_\_\_\_\_

17.  $7 - 1 =$  \_\_\_\_\_

18.  $4 - 3 =$  \_\_\_\_\_

19.  $11 - 9 =$  \_\_\_\_\_

20.  $1 - 1 =$  \_\_\_\_\_

21.  $9 - 6 =$  \_\_\_\_\_

22.  $14 - 5 =$  \_\_\_\_\_

23.  $14 - 8 =$  \_\_\_\_\_

24.  $8 - 4 =$  \_\_\_\_\_

25.  $7 - 5 =$  \_\_\_\_\_

26.  $8 - 1 =$  \_\_\_\_\_

27.  $11 - 3 =$  \_\_\_\_\_

28.  $8 - 3 =$  \_\_\_\_\_

29.  $12 - 3 =$  \_\_\_\_\_

30.  $6 - 4 =$  \_\_\_\_\_

31.  $6 - 3 =$  \_\_\_\_\_

32.  $9 - 0 =$  \_\_\_\_\_

33.  $7 - 6 =$  \_\_\_\_\_

34.  $10 - 8 =$  \_\_\_\_\_

35.  $13 - 9 =$  \_\_\_\_\_

36.  $10 - 5 =$  \_\_\_\_\_

37.  $8 - 5 =$  \_\_\_\_\_

38.  $12 - 4 =$  \_\_\_\_\_

39.  $13 - 5 =$  \_\_\_\_\_

40.  $10 - 6 =$  \_\_\_\_\_

41.  $2 - 2 =$  \_\_\_\_\_

42.  $12 - 7 =$  \_\_\_\_\_

43.  $11 - 5 =$  \_\_\_\_\_

44.  $9 - 9 =$  \_\_\_\_\_

45.  $13 - 4 =$  \_\_\_\_\_

46.  $9 - 2 =$  \_\_\_\_\_

47.  $10 - 9 =$  \_\_\_\_\_

48.  $9 - 8 =$  \_\_\_\_\_

49.  $14 - 7 =$  \_\_\_\_\_

50.  $18 - 9 =$  \_\_\_\_\_

Give each answer.

1.  $2 + 2 =$  \_\_\_\_\_

2.  $3 + 7 =$  \_\_\_\_\_

3.  $4 + 8 =$  \_\_\_\_\_

4.  $5 + 1 =$  \_\_\_\_\_

5.  $4 + 2 =$  \_\_\_\_\_

6.  $8 + 9 =$  \_\_\_\_\_

7.  $6 + 6 =$  \_\_\_\_\_

8.  $2 + 9 =$  \_\_\_\_\_

9.  $8 + 1 =$  \_\_\_\_\_

10.  $8 + 3 =$  \_\_\_\_\_

11.  $5 + 3 =$  \_\_\_\_\_

12.  $2 + 4 =$  \_\_\_\_\_

13.  $9 + 5 =$  \_\_\_\_\_

14.  $9 + 3 =$  \_\_\_\_\_

15.  $9 + 0 =$  \_\_\_\_\_

16.  $3 + 3 =$  \_\_\_\_\_

17.  $1 + 6 =$  \_\_\_\_\_

18.  $5 + 5 =$  \_\_\_\_\_

19.  $6 + 5 =$  \_\_\_\_\_

20.  $9 + 4 =$  \_\_\_\_\_

21.  $7 + 2 =$  \_\_\_\_\_

22.  $1 + 9 =$  \_\_\_\_\_

23.  $8 + 5 =$  \_\_\_\_\_

24.  $7 + 7 =$  \_\_\_\_\_

25.  $9 + 9 =$  \_\_\_\_\_

26.  $17 - 9 =$  \_\_\_\_\_

27.  $11 - 4 =$  \_\_\_\_\_

28.  $3 - 2 =$  \_\_\_\_\_

29.  $14 - 9 =$  \_\_\_\_\_

30.  $7 - 7 =$  \_\_\_\_\_

31.  $9 - 0 =$  \_\_\_\_\_

32.  $11 - 9 =$  \_\_\_\_\_

33.  $1 - 1 =$  \_\_\_\_\_

34.  $9 - 6 =$  \_\_\_\_\_

35.  $14 - 8 =$  \_\_\_\_\_

36.  $8 - 4 =$  \_\_\_\_\_

37.  $7 - 5 =$  \_\_\_\_\_

38.  $10 - 6 =$  \_\_\_\_\_

39.  $7 - 3 =$  \_\_\_\_\_

40.  $14 - 7 =$  \_\_\_\_\_

41.  $10 - 5 =$  \_\_\_\_\_

42.  $8 - 5 =$  \_\_\_\_\_

43.  $12 - 3 =$  \_\_\_\_\_

44.  $10 - 6 =$  \_\_\_\_\_

45.  $2 - 2 =$  \_\_\_\_\_

46.  $10 - 8 =$  \_\_\_\_\_

47.  $15 - 7 =$  \_\_\_\_\_

48.  $12 - 6 =$  \_\_\_\_\_

49.  $8 - 6 =$  \_\_\_\_\_

50.  $12 - 8 =$  \_\_\_\_\_

Name \_\_\_\_\_

**Basic-Facts Timed Test 4**

Give each answer.

1.  $7 + 6 =$  \_\_\_\_\_

2.  $5 + 4 =$  \_\_\_\_\_

3.  $3 + 2 =$  \_\_\_\_\_

4.  $2 + 1 =$  \_\_\_\_\_

5.  $3 + 6 =$  \_\_\_\_\_

6.  $8 + 7 =$  \_\_\_\_\_

7.  $6 + 4 =$  \_\_\_\_\_

8.  $7 + 3 =$  \_\_\_\_\_

9.  $7 + 9 =$  \_\_\_\_\_

10.  $4 + 6 =$  \_\_\_\_\_

11.  $1 + 5 =$  \_\_\_\_\_

12.  $6 + 7 =$  \_\_\_\_\_

13.  $4 + 7 =$  \_\_\_\_\_

14.  $9 + 4 =$  \_\_\_\_\_

15.  $8 + 6 =$  \_\_\_\_\_

16.  $7 + 7 =$  \_\_\_\_\_

17.  $8 + 2 =$  \_\_\_\_\_

18.  $3 + 8 =$  \_\_\_\_\_

19.  $2 + 8 =$  \_\_\_\_\_

20.  $7 + 5 =$  \_\_\_\_\_

21.  $5 + 8 =$  \_\_\_\_\_

22.  $8 + 8 =$  \_\_\_\_\_

23.  $5 + 0 =$  \_\_\_\_\_

24.  $5 + 5 =$  \_\_\_\_\_

25.  $6 + 9 =$  \_\_\_\_\_

26.  $13 - 6 =$  \_\_\_\_\_

27.  $10 - 4 =$  \_\_\_\_\_

28.  $15 - 6 =$  \_\_\_\_\_

29.  $17 - 8 =$  \_\_\_\_\_

30.  $9 - 5 =$  \_\_\_\_\_

31.  $13 - 4 =$  \_\_\_\_\_

32.  $8 - 7 =$  \_\_\_\_\_

33.  $15 - 8 =$  \_\_\_\_\_

34.  $16 - 7 =$  \_\_\_\_\_

35.  $10 - 1 =$  \_\_\_\_\_

36.  $14 - 6 =$  \_\_\_\_\_

37.  $5 - 5 =$  \_\_\_\_\_

38.  $13 - 7 =$  \_\_\_\_\_

39.  $12 - 4 =$  \_\_\_\_\_

40.  $15 - 9 =$  \_\_\_\_\_

41.  $16 - 8 =$  \_\_\_\_\_

42.  $18 - 9 =$  \_\_\_\_\_

43.  $7 - 3 =$  \_\_\_\_\_

44.  $11 - 8 =$  \_\_\_\_\_

45.  $16 - 9 =$  \_\_\_\_\_

46.  $11 - 7 =$  \_\_\_\_\_

47.  $10 - 3 =$  \_\_\_\_\_

48.  $11 - 6 =$  \_\_\_\_\_

49.  $12 - 9 =$  \_\_\_\_\_

50.  $7 - 2 =$  \_\_\_\_\_

Name \_\_\_\_\_

**Basic-Facts Timed Test 5**

Give each answer.

1.  $1 + 4 =$  \_\_\_\_\_

2.  $6 + 9 =$  \_\_\_\_\_

3.  $4 + 5 =$  \_\_\_\_\_

4.  $9 + 8 =$  \_\_\_\_\_

5.  $2 + 7 =$  \_\_\_\_\_

6.  $5 + 8 =$  \_\_\_\_\_

7.  $6 + 5 =$  \_\_\_\_\_

8.  $0 + 5 =$  \_\_\_\_\_

9.  $5 + 7 =$  \_\_\_\_\_

10.  $3 + 9 =$  \_\_\_\_\_

11.  $1 + 7 =$  \_\_\_\_\_

12.  $4 + 3 =$  \_\_\_\_\_

13.  $7 + 8 =$  \_\_\_\_\_

14.  $5 + 6 =$  \_\_\_\_\_

15.  $7 + 6 =$  \_\_\_\_\_

16.  $8 + 4 =$  \_\_\_\_\_

17.  $9 + 6 =$  \_\_\_\_\_

18.  $9 + 9 =$  \_\_\_\_\_

19.  $4 + 9 =$  \_\_\_\_\_

20.  $7 + 5 =$  \_\_\_\_\_

21.  $4 + 7 =$  \_\_\_\_\_

22.  $9 + 7 =$  \_\_\_\_\_

23.  $3 + 4 =$  \_\_\_\_\_

24.  $6 + 7 =$  \_\_\_\_\_

25.  $2 + 6 =$  \_\_\_\_\_

26.  $8 - 8 =$  \_\_\_\_\_

27.  $15 - 7 =$  \_\_\_\_\_

28.  $12 - 5 =$  \_\_\_\_\_

29.  $6 - 6 =$  \_\_\_\_\_

30.  $15 - 6 =$  \_\_\_\_\_

31.  $11 - 2 =$  \_\_\_\_\_

32.  $10 - 4 =$  \_\_\_\_\_

33.  $9 - 7 =$  \_\_\_\_\_

34.  $16 - 9 =$  \_\_\_\_\_

35.  $7 - 4 =$  \_\_\_\_\_

36.  $10 - 8 =$  \_\_\_\_\_

37.  $14 - 6 =$  \_\_\_\_\_

38.  $9 - 4 =$  \_\_\_\_\_

39.  $13 - 8 =$  \_\_\_\_\_

40.  $16 - 7 =$  \_\_\_\_\_

41.  $15 - 9 =$  \_\_\_\_\_

42.  $10 - 2 =$  \_\_\_\_\_

43.  $6 - 5 =$  \_\_\_\_\_

44.  $12 - 9 =$  \_\_\_\_\_

45.  $12 - 6 =$  \_\_\_\_\_

46.  $9 - 3 =$  \_\_\_\_\_

47.  $5 - 2 =$  \_\_\_\_\_

48.  $16 - 8 =$  \_\_\_\_\_

49.  $2 - 2 =$  \_\_\_\_\_

50.  $10 - 7 =$  \_\_\_\_\_

Name \_\_\_\_\_

**Basic-Facts Timed Test 11**

Give each answer.

1.  $1 + 3 =$  \_\_\_\_\_

2.  $7 + 3 =$  \_\_\_\_\_

3.  $0 + 9 =$  \_\_\_\_\_

4.  $9 + 2 =$  \_\_\_\_\_

5.  $2 + 1 =$  \_\_\_\_\_

6.  $3 + 5 =$  \_\_\_\_\_

7.  $7 + 8 =$  \_\_\_\_\_

8.  $6 + 4 =$  \_\_\_\_\_

9.  $5 + 6 =$  \_\_\_\_\_

10.  $9 + 7 =$  \_\_\_\_\_

11.  $9 + 8 =$  \_\_\_\_\_

12.  $6 + 6 =$  \_\_\_\_\_

13.  $8 + 4 =$  \_\_\_\_\_

14.  $8 + 8 =$  \_\_\_\_\_

15.  $5 + 2 =$  \_\_\_\_\_

16.  $3 + 4 =$  \_\_\_\_\_

17.  $4 + 7 =$  \_\_\_\_\_

18.  $1 + 4 =$  \_\_\_\_\_

19.  $8 + 7 =$  \_\_\_\_\_

20.  $1 + 1 =$  \_\_\_\_\_

21.  $6 + 3 =$  \_\_\_\_\_

22.  $4 + 5 =$  \_\_\_\_\_

23.  $5 + 9 =$  \_\_\_\_\_

24.  $0 + 6 =$  \_\_\_\_\_

25.  $7 + 9 =$  \_\_\_\_\_

26.  $9 - 6 =$  \_\_\_\_\_

27.  $14 - 5 =$  \_\_\_\_\_

28.  $14 - 8 =$  \_\_\_\_\_

29.  $8 - 4 =$  \_\_\_\_\_

30.  $7 - 5 =$  \_\_\_\_\_

31.  $8 - 1 =$  \_\_\_\_\_

32.  $11 - 3 =$  \_\_\_\_\_

33.  $8 - 3 =$  \_\_\_\_\_

34.  $12 - 3 =$  \_\_\_\_\_

35.  $13 - 5 =$  \_\_\_\_\_

36.  $10 - 6 =$  \_\_\_\_\_

37.  $11 - 5 =$  \_\_\_\_\_

38.  $9 - 9 =$  \_\_\_\_\_

39.  $6 - 4 =$  \_\_\_\_\_

40.  $6 - 3 =$  \_\_\_\_\_

41.  $9 - 0 =$  \_\_\_\_\_

42.  $7 - 6 =$  \_\_\_\_\_

43.  $4 - 1 =$  \_\_\_\_\_

44.  $9 - 4 =$  \_\_\_\_\_

45.  $11 - 9 =$  \_\_\_\_\_

46.  $4 - 4 =$  \_\_\_\_\_

47.  $10 - 9 =$  \_\_\_\_\_

48.  $9 - 8 =$  \_\_\_\_\_

49.  $14 - 7 =$  \_\_\_\_\_

50.  $13 - 9 =$  \_\_\_\_\_