

Dear In-Coming Third Grade Students and Parents:

Happy summer! It's hard to believe that summer is finally here. Just think...sleeping in, long walks on the beach, cookouts, swimming, boating, sailing, reading for pleasure...AND 60 + days without MATH!

We have enclosed the following math sheets in order to help keep your math skills current. All of the work is a review from second grade math class and math that we will review during the first couple of weeks of school. If you have a hard time with anything, just set it aside and we'll go over it when school begins. Please continue to study your math facts as well. There are multiple math fact sheets. Ideally, your child should be able to complete the facts in 2 minutes. Please feel free to duplicate the sheets and complete one every day.

We have also included a reading list with some old favorites. There's nothing better than sitting under a tree in the shade, or on the beach by the water's edge, with a good book. Make a list of the books you read during the summer. We are requiring that you read one fiction book and one non-fiction book of your choice over the summer. There will be a simple project in the fall for each.

Last and not least, keep a journal of all the fun you have this summer. This will help you remember the good times and help you remember to write using complete sentences, uppercase letters and proper punctuation. Please note, we are not correcting the journals. This is for your benefit only.

Stay healthy and safe. God Bless you and we look forward to seeing you at the end of August.

Fondly,
Mrs. Petrie
Ms. King



Grade Three Supply List 2023-2024

Personal Supplies

****24 plain yellow pencils, Ticonderoga brand, already sharpened (We use a lot of these!)**

***1 large pink eraser**

***2 boxes of Crayola Crayons (16 count)**

******4 Elmer's Jumbo Glue Sticks (small ones do not last)**

1 Plain pencil box, without a commercial character (label)

4 Folders of your choice to remain in the desk

4 Composition Notebooks

1 clip board

1 pair scissors

***4 packages of index cards**

Index card box

1 set of ear buds.

1 3-ring binder with dividers and sheet protectors. (please do not purchase until after open house)

***Voluntary Classroom Supplies**

***2 boxes Kleenex Tissues (We use a lot of these!)**

1 Box Wet Wipes, for hands

2 Box of Clorox Wipes, for desks

2 package paper plates

1 package each of jumbo storage bags and Baggies or quart size bags

2 rolls of paper towels

Plastic silverware for snacks and projects.

***If you are able to contribute these supplies to our classroom it is greatly appreciated. These supplies help to keep the classroom running smoothly.**

****These may need to be replaced during the year. The composite of the pencils have changed over the years, making them very difficult to sharpen, and stay sharpened without breaking. I found the Ticonderoga brand lasts longer, and is easier to sharpen.**

*****FYI...The glue sticks in the kit came dried up and we were unable to use them.**



Grade Three; Suggested Summer Reading

Fiction

Adler, David - Young Cam Jansen Series
Christopher, Matt - any sports titles
Cleary, Beverly - Ramona and Henry Huggins Titles
Cole, Joanna - Magic School Bus Series
Cohen, Barbara - Molly's Pilgrim
Dadey, Debbie - Bailey School Kids Series
Danziger, Paula - Amber Brown Series
Gardiner, John Reynolds - Stone Fox
Hardy Boys Series
Kline, Suzy - Horrible Harry Series
MacLachlan, Patricia - Sarah, Plain and Tall
Nancy Drew Series
Osborne, Mary Pope - Magic Tree House Series
Park, Barbara - June B. Jones Series
Parrish, Peggy - any Amelia Bedelia titles
Polacco, Patricia
Sachar, Louis - Wayside School Series
Sobol, Donald - Encyclopedia Brown Series
Sharmat, Marjorie - Nate the Great Series
Trixie Belden Series
Warner, Gertrude Chandler - Boxcar Children Series
Wilder, Laura Ingalls

Non-Fiction

Biographies
How-to books
Informational books or articles
Who Is/Was or What Is/Was Series

The above list is suggested reading only. Please encourage your child to read for pleasure daily. In early September, the students will be assigned a book jacket for one fiction book he/she has read during the summer. The students will choose one non-fictional story read during the summer and present 5-10 facts orally to the class.

Circle the letter of the correct answer.

1. Find the related addition fact.

$$7 + 5 = 12$$


A. $5 + 12 = 17$

B. $5 + 7 = 12$

C. $7 + 12 = 19$

D. $7 + 7 = 14$

2. What time does this clock show?



A. 12:30

C. 1:30

B. 1:00

D. 2:30

3. Which number sentence solves this problem?

Tim has 7 dogs.

Mary has 2 dogs.

How many more dogs does Tim have than Mary?



A. $7 - 2 = 5$

C. $7 - 3 = 4$

B. $7 + 2 = 9$

D. $7 + 0 = 7$

4. Add. Try different ways.

$$\begin{array}{r} 4 \\ 4 \\ + 5 \\ \hline \end{array}$$

A. 12

C. 14

B. 13

D. 15

5. Find the missing number.

$$14 - 6 = \square$$

$$6 + \square = 14$$

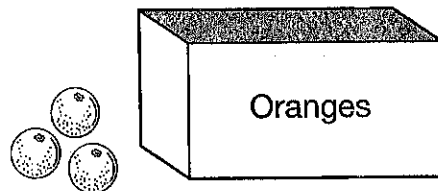
A. 6

C. 9

B. 8

D. 20

6. There are 10 oranges in all. How many of them are in the box?



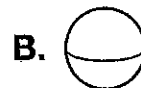
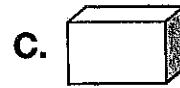
A. 4

C. 7

B. 6

D. 8

7. Which shape has 5 flat surfaces, 5 vertices, and 8 edges?



8. Add $9 + 7$.

A. 14

C. 16

B. 15

D. 17

9. Find the statement that is TRUE.

A. $15 > 25$

C. $71 < 73$

B. $18 = 81$

D. $35 < 34$

10. Count on to find the total amount.



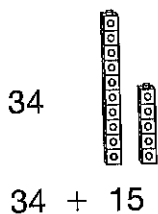
A. 97¢

C. 85¢

B. 92¢

D. 67¢

11. Add.



A. 38

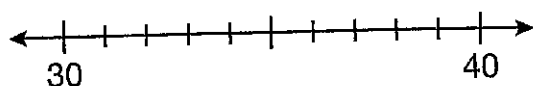
C. 47

B. 39

D. 49

12. Find the closest ten.

36 is closest to .



A. 20

C. 40

B. 30

D. 50

13. Find the shape that is congruent to the first shape.



A.



C.



B.



D.



14. Use the graph to answer the question. How many more chapter books than poetry books are in our room?

Kinds of Books in Our Room	
Poetry	
Chapter	
Picture	

Each = 2 books

A. 10

C. 4

B. 6

D. 2

15. Add $47 + 37$.

Tens	Ones
+ 3	7

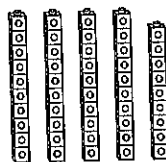
A. 10

C. 84

B. 74

D. 714

16. Subtract: $49 - 26$




A. 13

C. 75

B. 23

D. 113

17. Find the fraction for the shaded part of the shape.



- A. $\frac{1}{2}$ C. $\frac{1}{4}$
B. $\frac{1}{3}$ D. $\frac{1}{5}$

18. Li read for 60 minutes.
Hattie read for 39 minutes.
How many more minutes did
Li read than Hattie?

- A. 99 more minutes
B. 39 more minutes
C. 31 more minutes
D. 21 more minutes

19. Find the number.



Hundreds	Tens	Ones

- A. 145 C. 451
B. 154 D. 541

20. Add in any order.


$$\begin{array}{r} 32 \\ 14 \\ + 8 \\ \hline \end{array}$$

- A. 514 C. 54
B. 414 D. 44

21. Estimate $87 - 26$.

- A. 120 C. 60
B. 90 D. 40

22. Choose the best estimate for
the height of the box.



- A. About 27 centimeters
B. About 27 meters
C. About 27 feet
D. About 27 yards

23. Choose the best estimate for
the weight of the can.



- A. About 1 ounce
B. About 1 pound
C. About 1 gram
D. About 10 pounds

24. Which of these sets of numbers are in order from least to greatest?

- A. 102, 201, 210, 120
- B. 385, 485, 384, 483
- C. 422, 415, 420, 399
- D. 603, 630, 636, 663

25. Estimate. Find the sum that is MORE THAN 600.

- A. $178 + 266$
- B. $395 + 142$
- C. $472 + 283$
- D. $289 + 215$

26. Add.

$$\begin{array}{r} 695 \\ + 141 \\ \hline \end{array}$$

- A. 554
- B. 736
- C. 836
- D. 7,136

27. Find the number that comes before 280.

____, 280


- A. 279
- B. 281
- C. 285
- D. 290

28. Subtract.

$$\begin{array}{r} 347 \\ - 186 \\ \hline \end{array}$$


- A. 161
- B. 241
- C. 261
- D. 281

29. Multiply 2×4 .



- A. 2
- B. 4
- C. 6
- D. 8

30. Divide 6 teddy bears into 2 boxes. How many teddy bears go in each box?



- A. 8
- B. 6
- C. 4
- D. 3

Name _____

Basic-Facts Timed Test 1

Give each answer.

1. $2 + 2 =$ _____

2. $3 + 7 =$ _____

3. $4 + 8 =$ _____

4. $3 + 1 =$ _____

5. $5 + 1 =$ _____

6. $9 + 1 =$ _____

7. $8 + 9 =$ _____

8. $6 + 6 =$ _____

9. $0 + 4 =$ _____

10. $6 + 2 =$ _____

11. $8 + 1 =$ _____

12. $1 + 2 =$ _____

13. $7 + 4 =$ _____

14. $4 + 2 =$ _____

15. $5 + 9 =$ _____

16. $0 + 7 =$ _____

17. $4 + 1 =$ _____

18. $1 + 3 =$ _____

19. $2 + 9 =$ _____

20. $0 + 1 =$ _____

21. $6 + 3 =$ _____

22. $9 + 5 =$ _____

23. $6 + 8 =$ _____

24. $4 + 4 =$ _____

25. $2 + 5 =$ _____

26. $7 + 1 =$ _____

27. $8 + 3 =$ _____

28. $5 + 3 =$ _____

29. $9 + 3 =$ _____

30. $2 + 4 =$ _____

31. $3 + 3 =$ _____

32. $9 + 0 =$ _____

33. $1 + 6 =$ _____

34. $2 + 8 =$ _____

35. $4 + 9 =$ _____

36. $5 + 5 =$ _____

37. $3 + 5 =$ _____

38. $9 + 3 =$ _____

39. $8 + 5 =$ _____

40. $4 + 6 =$ _____

41. $0 + 2 =$ _____

42. $5 + 7 =$ _____

43. $6 + 5 =$ _____

44. $0 + 9 =$ _____

45. $9 + 4 =$ _____

46. $7 + 2 =$ _____

47. $1 + 9 =$ _____

48. $1 + 8 =$ _____

49. $7 + 7 =$ _____

50. $9 + 9 =$ _____

Name _____

Basic-Facts Timed Test 2

Give each answer.

1. $4 - 2 =$ _____

2. $10 - 7 =$ _____

3. $12 - 8 =$ _____

4. $4 - 1 =$ _____

5. $6 - 1 =$ _____

6. $10 - 1 =$ _____

7. $17 - 9 =$ _____

8. $12 - 6 =$ _____

9. $4 - 0 =$ _____

10. $8 - 2 =$ _____

11. $9 - 1 =$ _____

12. $3 - 2 =$ _____

13. $11 - 4 =$ _____

14. $6 - 2 =$ _____

15. $14 - 9 =$ _____

16. $7 - 7 =$ _____

17. $7 - 1 =$ _____

18. $4 - 3 =$ _____

19. $11 - 9 =$ _____

20. $1 - 1 =$ _____

21. $9 - 6 =$ _____

22. $14 - 5 =$ _____

23. $14 - 8 =$ _____

24. $8 - 4 =$ _____

25. $7 - 5 =$ _____

26. $8 - 1 =$ _____

27. $11 - 3 =$ _____

28. $8 - 3 =$ _____

29. $12 - 3 =$ _____

30. $6 - 4 =$ _____

31. $6 - 3 =$ _____

32. $9 - 0 =$ _____

33. $7 - 6 =$ _____

34. $10 - 8 =$ _____

35. $13 - 9 =$ _____

36. $10 - 5 =$ _____

37. $8 - 5 =$ _____

38. $12 - 4 =$ _____

39. $13 - 5 =$ _____

40. $10 - 6 =$ _____

41. $2 - 2 =$ _____

42. $12 - 7 =$ _____

43. $11 - 5 =$ _____

44. $9 - 9 =$ _____

45. $13 - 4 =$ _____

46. $9 - 2 =$ _____

47. $10 - 9 =$ _____

48. $9 - 8 =$ _____

49. $14 - 7 =$ _____

50. $18 - 9 =$ _____

Name _____

Basic-Facts Timed Test 3

Give each answer.

1. $2 + 2 =$ _____

2. $3 + 7 =$ _____

3. $4 + 8 =$ _____

4. $5 + 1 =$ _____

5. $4 + 2 =$ _____

6. $8 + 9 =$ _____

7. $6 + 6 =$ _____

8. $2 + 9 =$ _____

9. $8 + 1 =$ _____

10. $8 + 3 =$ _____

11. $5 + 3 =$ _____

12. $2 + 4 =$ _____

13. $9 + 5 =$ _____

14. $9 + 3 =$ _____

15. $9 + 0 =$ _____

16. $3 + 3 =$ _____

17. $1 + 6 =$ _____

18. $5 + 5 =$ _____

19. $6 + 5 =$ _____

20. $9 + 4 =$ _____

21. $7 + 2 =$ _____

22. $1 + 9 =$ _____

23. $8 + 5 =$ _____

24. $7 + 7 =$ _____

25. $9 + 9 =$ _____

26. $17 - 9 =$ _____

27. $11 - 4 =$ _____

28. $3 - 2 =$ _____

29. $14 - 9 =$ _____

30. $7 - 7 =$ _____

31. $9 - 0 =$ _____

32. $11 - 9 =$ _____

33. $1 - 1 =$ _____

34. $9 - 6 =$ _____

35. $14 - 8 =$ _____

36. $8 - 4 =$ _____

37. $7 - 5 =$ _____

38. $10 - 6 =$ _____

39. $7 - 3 =$ _____

40. $14 - 7 =$ _____

41. $10 - 5 =$ _____

42. $8 - 5 =$ _____

43. $12 - 3 =$ _____

44. $10 - 6 =$ _____

45. $2 - 2 =$ _____

46. $10 - 8 =$ _____

47. $15 - 7 =$ _____

48. $12 - 6 =$ _____

49. $8 - 6 =$ _____

50. $12 - 8 =$ _____

Name _____

Basic-Facts Timed Test 4

Give each answer.

1. $7 + 6 =$ _____

2. $5 + 4 =$ _____

3. $3 + 2 =$ _____

4. $2 + 1 =$ _____

5. $3 + 6 =$ _____

6. $8 + 7 =$ _____

7. $6 + 4 =$ _____

8. $7 + 3 =$ _____

9. $7 + 9 =$ _____

10. $4 + 6 =$ _____

11. $1 + 5 =$ _____

12. $6 + 7 =$ _____

13. $4 + 7 =$ _____

14. $9 + 4 =$ _____

15. $8 + 6 =$ _____

16. $7 + 7 =$ _____

17. $8 + 2 =$ _____

18. $3 + 8 =$ _____

19. $2 + 8 =$ _____

20. $7 + 5 =$ _____

21. $5 + 8 =$ _____

22. $8 + 8 =$ _____

23. $5 + 0 =$ _____

24. $5 + 5 =$ _____

25. $6 + 9 =$ _____

26. $13 - 6 =$ _____

27. $10 - 4 =$ _____

28. $15 - 6 =$ _____

29. $17 - 8 =$ _____

30. $9 - 5 =$ _____

31. $13 - 4 =$ _____

32. $8 - 7 =$ _____

33. $15 - 8 =$ _____

34. $16 - 7 =$ _____

35. $10 - 1 =$ _____

36. $14 - 6 =$ _____

37. $5 - 5 =$ _____

38. $13 - 7 =$ _____

39. $12 - 4 =$ _____

40. $15 - 9 =$ _____

41. $16 - 8 =$ _____

42. $18 - 9 =$ _____

43. $7 - 3 =$ _____

44. $11 - 8 =$ _____

45. $16 - 9 =$ _____

46. $11 - 7 =$ _____

47. $10 - 3 =$ _____

48. $11 - 6 =$ _____

49. $12 - 9 =$ _____

50. $7 - 2 =$ _____

Name _____

Basic-Facts Timed Test 5

Give each answer.

1. $1 + 4 =$ _____

2. $6 + 9 =$ _____

3. $4 + 5 =$ _____

4. $9 + 8 =$ _____

5. $2 + 7 =$ _____

6. $5 + 8 =$ _____

7. $6 + 5 =$ _____

8. $0 + 5 =$ _____

9. $5 + 7 =$ _____

10. $3 + 9 =$ _____

11. $1 + 7 =$ _____

12. $4 + 3 =$ _____

13. $7 + 8 =$ _____

14. $5 + 6 =$ _____

15. $7 + 6 =$ _____

16. $8 + 4 =$ _____

17. $9 + 6 =$ _____

18. $9 + 9 =$ _____

19. $4 + 9 =$ _____

20. $7 + 5 =$ _____

21. $4 + 7 =$ _____

22. $9 + 7 =$ _____

23. $3 + 4 =$ _____

24. $6 + 7 =$ _____

25. $2 + 6 =$ _____

26. $8 - 8 =$ _____

27. $15 - 7 =$ _____

28. $12 - 5 =$ _____

29. $6 - 6 =$ _____

30. $15 - 6 =$ _____

31. $11 - 2 =$ _____

32. $10 - 4 =$ _____

33. $9 - 7 =$ _____

34. $16 - 9 =$ _____

35. $7 - 4 =$ _____

36. $10 - 8 =$ _____

37. $14 - 6 =$ _____

38. $9 - 4 =$ _____

39. $13 - 8 =$ _____

40. $16 - 7 =$ _____

41. $15 - 9 =$ _____

42. $10 - 2 =$ _____

43. $6 - 5 =$ _____

44. $12 - 9 =$ _____

45. $12 - 6 =$ _____

46. $9 - 3 =$ _____

47. $5 - 2 =$ _____

48. $16 - 8 =$ _____

49. $2 - 2 =$ _____

50. $10 - 7 =$ _____

Name _____

Basic-Facts Timed Test 11

Give each answer.

1. $1 + 3 =$ _____

2. $7 + 3 =$ _____

3. $0 + 9 =$ _____

4. $9 + 2 =$ _____

5. $2 + 1 =$ _____

6. $3 + 5 =$ _____

7. $7 + 8 =$ _____

8. $6 + 4 =$ _____

9. $5 + 6 =$ _____

10. $9 + 7 =$ _____

11. $9 + 8 =$ _____

12. $6 + 6 =$ _____

13. $8 + 4 =$ _____

14. $8 + 8 =$ _____

15. $5 + 2 =$ _____

16. $3 + 4 =$ _____

17. $4 + 7 =$ _____

18. $1 + 4 =$ _____

19. $8 + 7 =$ _____

20. $1 + 1 =$ _____

21. $6 + 3 =$ _____

22. $4 + 5 =$ _____

23. $5 + 9 =$ _____

24. $0 + 6 =$ _____

25. $7 + 9 =$ _____

26. $9 - 6 =$ _____

27. $14 - 5 =$ _____

28. $14 - 8 =$ _____

29. $8 - 4 =$ _____

30. $7 - 5 =$ _____

31. $8 - 1 =$ _____

32. $11 - 3 =$ _____

33. $8 - 3 =$ _____

34. $12 - 3 =$ _____

35. $13 - 5 =$ _____

36. $10 - 6 =$ _____

37. $11 - 5 =$ _____

38. $9 - 9 =$ _____

39. $6 - 4 =$ _____

40. $6 - 3 =$ _____

41. $9 - 0 =$ _____

42. $7 - 6 =$ _____

43. $4 - 1 =$ _____

44. $9 - 4 =$ _____

45. $11 - 9 =$ _____

46. $4 - 4 =$ _____

47. $10 - 9 =$ _____

48. $9 - 8 =$ _____

49. $14 - 7 =$ _____

50. $13 - 9 =$ _____